



Vybarvi berušku, která nese na zádech číslo, které patří do příkladu:


$$5 + 5 + \underline{\quad} = 14$$




$$3 + 7 + \underline{\quad} = 16$$




$$6 + 4 + \underline{\quad} = 20$$




$$8 + 2 + \underline{\quad} = 13$$




$$2 + 7 + \underline{\quad} = 19$$



$$1 + 9 + \underline{\quad} = 15$$



$$7 + 3 + \underline{\quad} = 17$$



$$4 + 6 + \underline{\quad} = 13$$

