









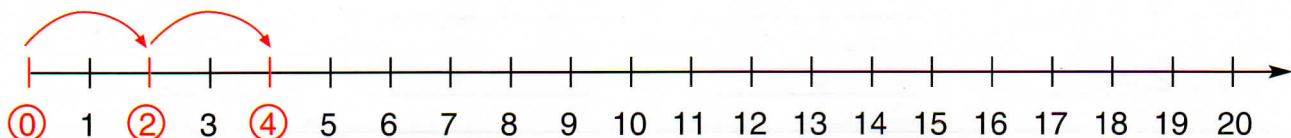


# NÁSOBKY DVOU

1. Doplň tabulku:

a	1	2	3	4	5	6	7	8	9	10
										
	2	+ 2	+ 2	+ 2	+ 2	+ 2	+ 2	+ 2	+ 2	+ 2
a . 2	2	4								

2. Vyznač násobky čísla 2 na číselné ose:



3. Pozoruj:

činitel	činitel	součin
1	. 2	= 2
5	. 2	= 10
10	. 2	= 20

5. Zapiš do tabulky součiny:

0 . 2 =		2 . 0 =	
1 . 2 =		2 . 1 =	
2 . 2 =		2 . 2 =	
3 . 2 =		2 . 3 =	
4 . 2 =		2 . 4 =	
5 . 2 =		2 . 5 =	
6 . 2 =		2 . 6 =	
7 . 2 =		2 . 7 =	
8 . 2 =		2 . 8 =	
9 . 2 =		2 . 9 =	
10 . 2 =		2 . 10 =	

4. Zapiš oba příklady na násobení:

\_\_\_\_\_

\_\_\_\_\_

\_\_\_\_\_

6. Vybarvi násobky čísla 2. Vypiš je na řádek (tam i zpět). Nauč se je říkat z paměti za sebou:

0	1	2	3	4	5	6	7	8	9	10	11	12	13	14	15	16	17	18	19	20
---	---	---	---	---	---	---	---	---	---	----	----	----	----	----	----	----	----	----	----	----

0, 2, \_\_\_\_\_

20, 18, \_\_\_\_\_

